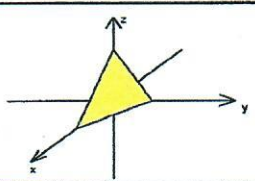
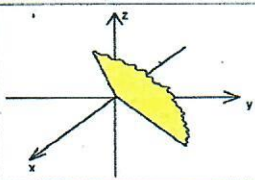
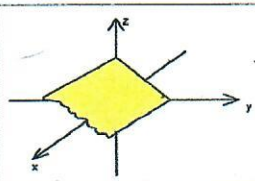
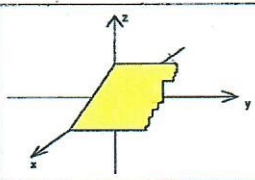
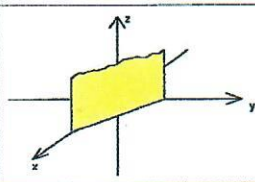
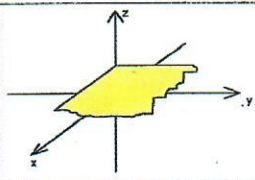
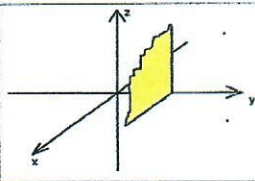


Ebene ...	Gleichung	Anzahl/Lage Spurpunkte Spurgeraden	Skizze im I. Oktant
in allgemeiner Lage	$ax+by+cz=d$	xyE xzE yzE $3/P_x, P_y, P_z$	
durchläuft in allgemeiner Lage 0	$ax+by+cz=0$	xyE xzE yzE $1/0$	
parallel zur x-Achse	$by+cz=d$	2 parallele SG zur x-A., yzE $2/P_y, P_z$	
parallel zur y-Achse	$ax+cz=d$	2 parallele SG zur y-A., xzE $2/P_x, P_z$	
parallel zur z-Achse	$ax+by=d$	2 parallele SG zur z-A., xyE $2/P_x, P_y$	
parallel zur x und y-Achse (parallel zur xy-Ebene)	$cz=d$	$xzE: \parallel xA$ $yzE: \parallel yA$ $1/P_z$	
parallel zur x und z-Achse (parallel zur xz-Ebene)	$by=d$	$xyE: \parallel xA$ $yzE: \parallel zA$ $1/P_y$	
parallel zur y und z-Achse (parallel zur yz-Ebene)	$ax=d$	$xyE: \parallel yA$ $xzE: \parallel zA$ $1/P_x$	